



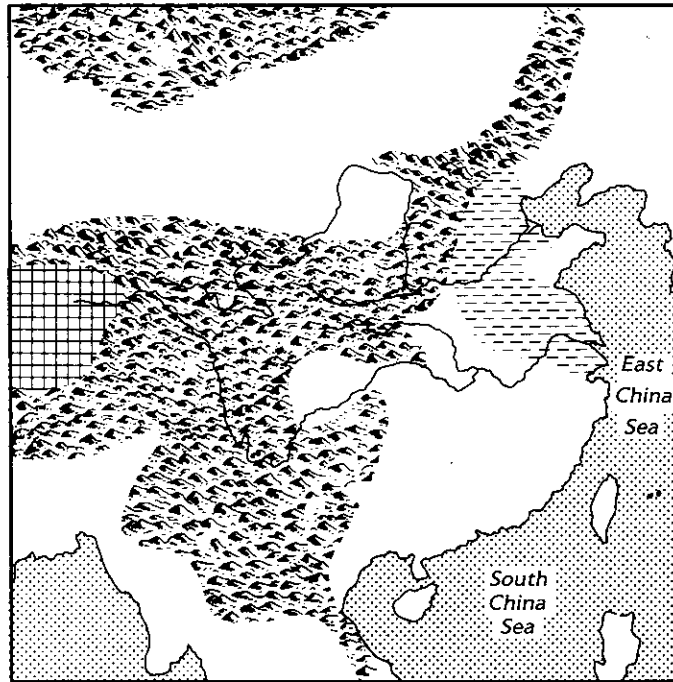
Name \_\_\_\_\_

Use with pages 114–118

# Using Maps

Use the map on this page to complete the activities below. For help, you can refer to pages 114–118 in your textbook.

1. The map below is of ancient China. Outline the Plateau of Tibet in light green. Then label it. Outline the North China Plain in dark green. Then label it.
2. Locate and label the Yellow Sea.
3. Locate and label the Huang River. Then trace the Huang River and its tributaries in blue. Describe the course of the Huang River. Where does it begin? What large stretch of land does it wind its way through? Into which sea does it empty?




---



---



---



---



---



---

4. Why did the Huang River and its tributaries become known as “China’s Sorrow”?

---



---



---



---



---



---



Name \_\_\_\_\_

Use with pages 114–118

# Thinking About Ancient China

Use the pictures on the right to complete the activities on this page. For help, you can refer to pages 114–118 in your textbook.

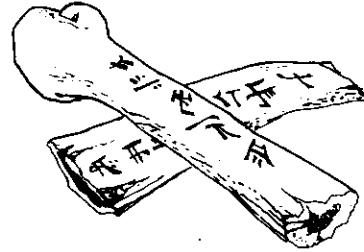
1. Draw a line to the picture that shows the earliest form of writing in East Asia.

What were these artifacts called?

\_\_\_\_\_

How were they used?

\_\_\_\_\_  
\_\_\_\_\_  
\_\_\_\_\_  
\_\_\_\_\_  
\_\_\_\_\_



2. Draw a line to the picture that shows modern Chinese writing.

How long ago was this system of writing developed?

\_\_\_\_\_


About how many modern Chinese characters are there?

\_\_\_\_\_  
\_\_\_\_\_

3. Draw a line to the picture that represents the first Chinese dynasty.

What tradition did this dynasty begin?

\_\_\_\_\_  
\_\_\_\_\_



Macmillan/McGraw-Hill